



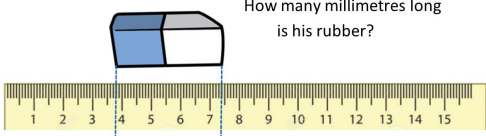
Converting between units of measure - 6 - Quiz A

Name:

Date:

WhiteRoseMaths

Ritchy is measuring items in his pencil case.
How many millimetres long is his rubber?



A 74 mm B 36 mm
C 4.4 mm D 44 mm

© White Rose 2017

Correct Answer: A B C D

Explanation:

.....

.....

.....


.....

.....

.....

WhiteRoseMaths

A cup of flour is 120 grams.
What fraction of a 1.5 kg bag of flour is one cup in its simplest form?



A $\frac{120}{1.5}$ B $\frac{4}{5}$ C $\frac{2}{25}$ D $\frac{12}{150}$

© White Rose 2017

Correct Answer: A B C D

Explanation:

.....

.....

.....

.....

.....

.....

WhiteRoseMaths

Amy and Zaki race each other in a 10K charity run.
Amy won, by how many seconds did she win?

Zaki: **01:01:04** A 159
B 119
C 109
D 41.99

Amy: **00:59:05**

© White Rose 2017

Correct Answer: A B C D

Explanation:

.....

.....

.....

.....

.....

.....

WhiteRoseMaths

The tallest man to have lived was 8 feet 11 inches high.
How far off being 9 feet high was he?

A 9 inches B 2.5 cm C 0.89 feet D 0.25 m

© White Rose 2017

Correct Answer: A B C D

Explanation:

.....

.....

.....


.....

.....

.....

WhiteRoseMaths

Which of these is the calculation to convert
3 and a half days into hours?

A $3 \times 12 + \frac{1}{2}$ B 3.5×12 

C $(3 + \frac{1}{2}) \times 24$ D $3 \times 24 + 0.5$

© White Rose 2017

Correct Answer: A B C D

Explanation:

.....

.....

.....

.....

.....

.....