



Negative Numbers - 6 - Quiz A

Name:

Date:

WhiteRoseMaths

$-6 + 6 = \square$

A B C D

-12 0 12 -6

© White Rose 2017

Correct Answer: A B C D

Explanation:

.....

.....

.....

.....

.....

.....

WhiteRoseMaths

The temperature drops from 8°C to -5°C .

By how many degrees did it fall?

A B C D

13°C 3°C 14°C 12°C

© White Rose 2017

Correct Answer: A B C D

Explanation:

.....

.....

.....

.....

.....

.....

WhiteRoseMaths

What is the missing number in this sequence?

$-4, -1, \square, 5$

A B C D

4 2 0 3

© White Rose 2017

Correct Answer: A B C D

Explanation:

.....

.....

.....

.....

.....

.....

WhiteRoseMaths

The temperature increases by 18°C from -3°C .

What is the new temperature?

A 21°C B -21°C C 15°C D -15°C

© White Rose 2017

Correct Answer: A B C D

Explanation:

.....

.....

.....

.....





.....

.....

WhiteRoseMaths

Complete the calculation:

$- 8 = -2$

A  B  C  D 

© White Rose 2017

Correct Answer: A B C D

Explanation:

.....

.....

.....

.....

.....

.....

WhiteRoseMaths

The temperature in Rome is 28°C and in Oslo it is -5°C .

What is the difference in temperatures?

A 23°C B 33°C C 24°C D 34°C

© White Rose 2017

Correct Answer: A B C D

Explanation:

.....

.....

.....

.....

.....

.....

WhiteRoseMaths

$18 - 30 =$

A -48 B -49 C -12 D -13

© White Rose 2017

Correct Answer: A B C D

Explanation:

.....

.....

.....

.....

.....

.....

WhiteRoseMaths

A lift starts on the ground floor and travels up 6 floors, then down 8 floors.

Which floor does it arrive at?

A Floor 2 B Ground floor C Floor -1 D Floor -2

© White Rose 2017

Correct Answer: A B C D

Explanation:

.....

.....

.....

.....

.....

.....

WhiteRoseMaths

Sam has £45 towards a bike which costs £80.

He borrows the money from his dad

Which calculation represents the problem?

A $45 + 80 = 125$

B $45 - 80 = -35$

C B and D

D $80 - 45 = 35$

© White Rose 2017

Correct Answer: A B C D

Explanation:

.....

.....

.....

.....

.....

.....

WhiteRoseMaths

What is the missing number in this sequence?

-55, -5, , 95

A -55 B 50 C 45 D 55

© White Rose 2017

Correct Answer: A B C D

Explanation:

.....

.....

.....

.....

.....

.....