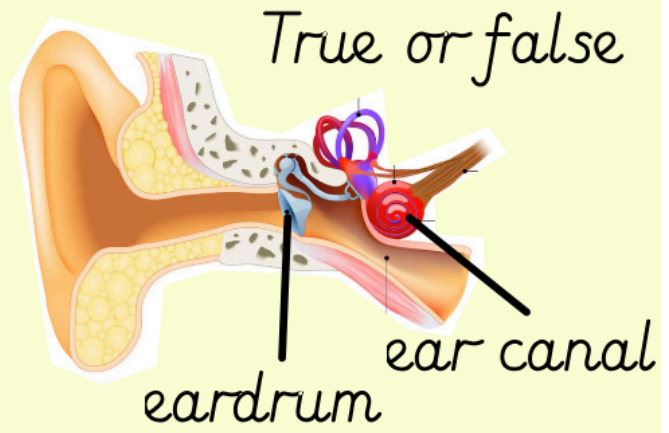


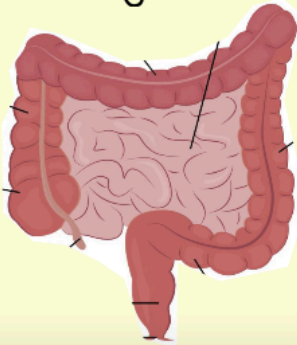
Name 3 types of rock.



Which type is this?



Here are two parts of the digestive system.



Name them and say what they do.

A mammal has...

(list 3 things)

An example of a mammal is ...

L.O. To understand the life-cycle of a plant.

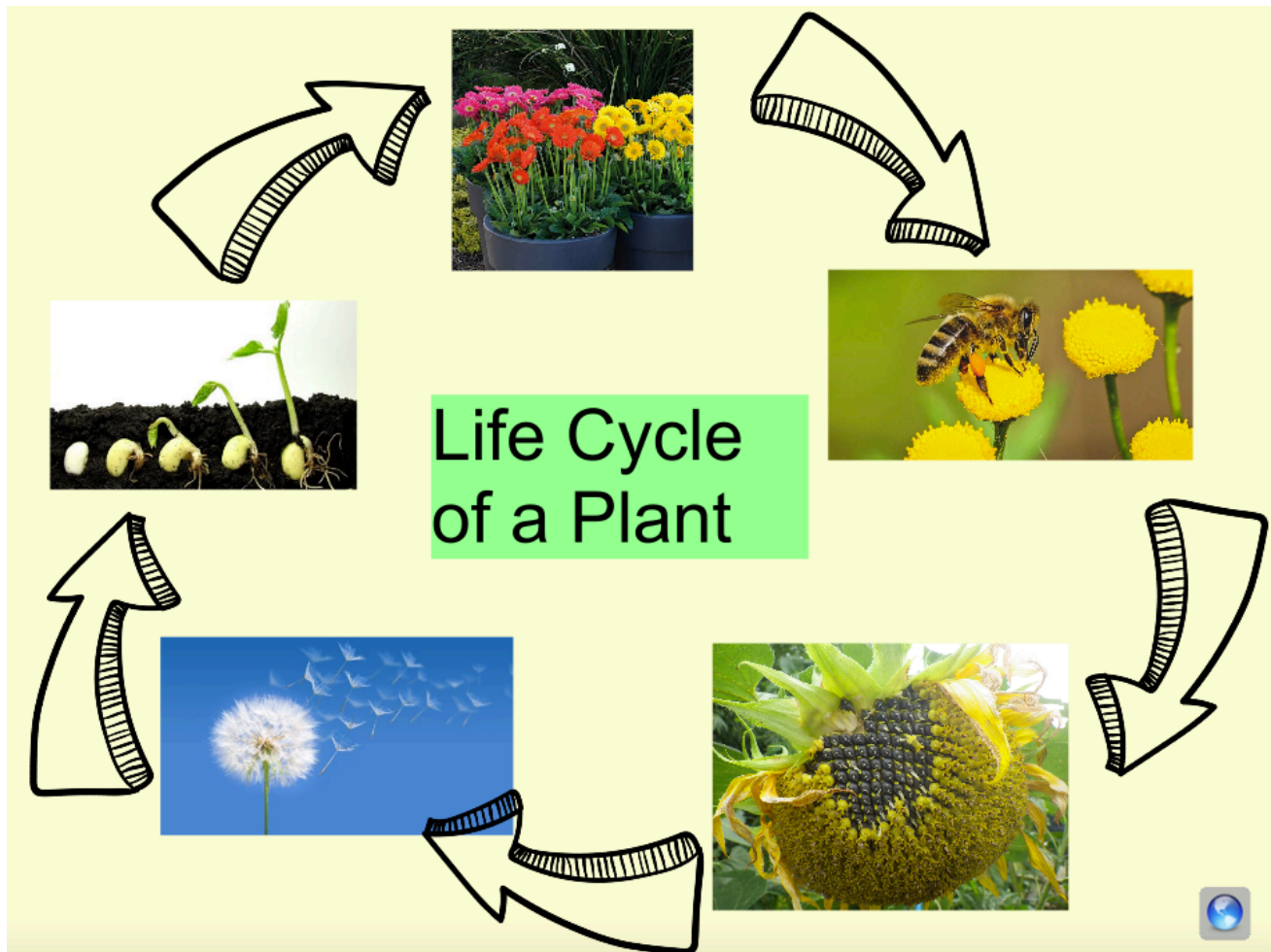


What is this diagram showing us?

Can you remember any of the parts of the plant shown in the diagram?

Here is a diagram of the life cycle of a plant. A 'cycle' goes around and around.
Can you remember another process that we learned about that does this?

Have a look at the video below for an introduction to the life cycle of a plant.



<https://www.bbc.co.uk/bitesize/clips/z3wsbk7>

Can you spot each part of the cycle shown in the video on the diagram above?

Where do you think the cycle starts?

Your task!

Complete the worksheet below. Draw the pictures of each part in the cycle and label them. Underneath your drawing, in your books, write a sentence to describe what is happening in each picture.

