



Telling time


Challenge: Label the clocks. Use the example provided, if needed.



1.



2.



3.



4.



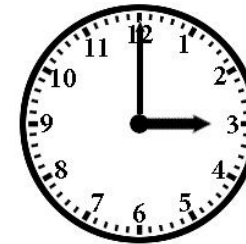
5.



6.



7.



8.



9.