



Addition and subtraction in context - 6 - Quiz A

Name:

Date:

WhiteRoseMaths

There are 75,600 people at a concert.
27,560 are standing, 32,480 are in the lower tier seating. The rest of the people are in the upper tier.

How many people are in the upper tier?

A 24,320 B 70,680 C 15,560 D 20,520

© White Rose 2017

Correct Answer: A B C D

Explanation:

.....

.....

.....

.....

.....

.....

WhiteRoseMaths

52,450 people are at a festival
There are 39,820 men and women.
The rest are children.
There are 12,250 more women than children.

How many women are at the festival?

A 27,570 B 380 C 24,880 D 12,630

© White Rose 2017

Correct Answer: A B C D

Explanation:

.....

.....

.....

.....

.....

.....

WhiteRoseMaths

There are 3 different coloured cubes in a box

4,120 are blue.
There are 1,345 more green than blue.
There are 245 less red than green.
How many cubes altogether?

A 15,295 B 5,710 C 5,220 D 14,805

© White Rose 2017

Correct Answer: A B C D

Explanation:

.....

.....

.....

.....

.....

.....

WhiteRoseMaths

Mount Fuji is 12,388 metres tall.
How much taller is it than the combined height of Ben Nevis, Snowdon and Scafell Pike?

Mountain	Height (metres)
Ben Nevis	1,344
Snowdon	1,085
Scafell Pike	978

A 3,407 m
 B 11,044 m
 C 8,981 m
 D 8,901

© White Rose 2017

Correct Answer: A B C D

Explanation:

.....

.....

.....

.....

.....

.....

WhiteRoseMaths

Manchester to Auckland is 12,448 miles
After 5,682 miles, the plane lands in Shanghai.
It travels another 6,084 miles to Christchurch.
How many more miles are left to travel?

A 24,214 miles
 B 6,766 miles

C 682 miles
 D 11,682 miles

© White Rose 2017

Correct Answer: A B C D

Explanation:

.....

.....

.....


.....

.....

.....

WhiteRoseMaths

Mia pays with a £20 note and gets £3 change.
What could she have bought?



A 5 packs of buns and 3 cakes
 B 3 cakes and 4 packs of buns

C 1 cake and 7 packs of buns
 D B and C

© White Rose 2017

Correct Answer: A B C D

Explanation:

.....

.....


.....

.....


.....

.....

WhiteRoseMaths



= £1.45



= £2.00

Work out the cost of one slice of bacon.

A 50p
 B 35p
 C 45p
 D 48p

© White Rose 2017

Correct Answer: A B C D

Explanation:

.....

.....

.....


.....

.....

.....

WhiteRoseMaths

Price list:
 Tin of beans: 65p
 Can of cola: 89p

I buy 

What change will I get from £5?

A £3.49 B £1.51 C £3.46 D £1.54

© White Rose 2017

Correct Answer: A B C D

Explanation:

.....

.....

.....

.....

.....

.....

WhiteRoseMaths

Howard drinks 11,271 millilitres of water in a week.
 Oliver drinks 11.04 litres of water.
 Charlotte drinks 22.99 litres of water

How many more ml did Charlotte drink than Howard and Oliver combined?

A 22,311 ml B 679 ml C 11,950 ml D 45,301 ml

© White Rose 2017

Correct Answer: A B C D

Explanation:

.....

.....

.....

.....

.....

.....

WhiteRoseMaths

Rachel has 3 cans of oil.
 Each oil can holds 1.25 litres.

How much oil is left if Rachel uses 3,500 ml?

A 250 ml B 0.25 ml C 2250 ml D 2.25 ml

© White Rose 2017

Correct Answer: A B C D

Explanation:

.....

.....

.....

.....

.....

.....